







kilo__	hecto__	déca__	_____	déci__	centi__	milli__
km	hm	dam	mètre	dm	cm	mm
kg			gramme			mg
			litre	dl	cl	ml



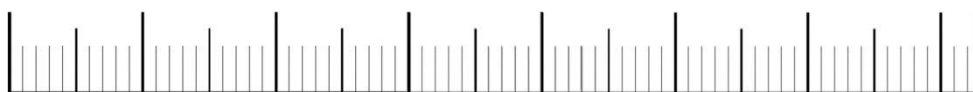
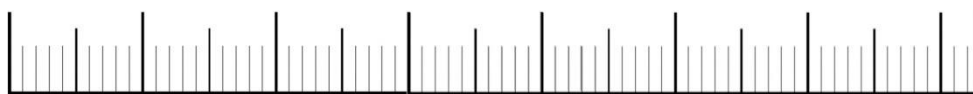
kilo__	hecto__	déca__	_____	déci__	centi__	milli__
km	hm	dam	mètre	dm	cm	mm
kg			gramme			mg
			litre	dl	cl	ml

	milliers	centaines	dizaines	unités

	milliers	centaines	dizaines	unités

			
	centaine(s)	dizaine(s)	unité(s)

			
	centaine(s)	dizaine(s)	unité(s)



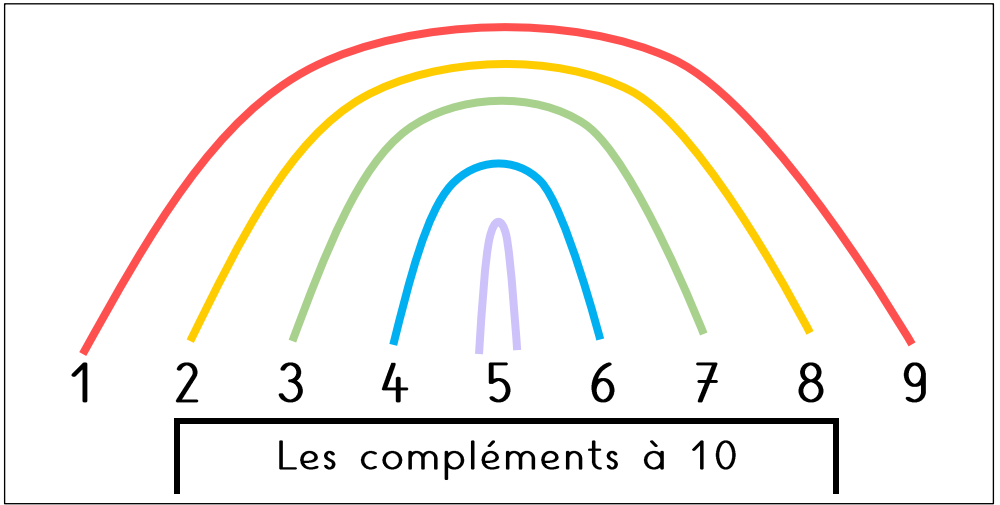
x	1	2	3	4	5	6	7	8	9	10
1	1	2	3	4	5	6	7	8	9	10
2	2	4	6	8	10	12	14	16	18	20
3	3	6	9	12	15	18	21	24	27	30
4	4	8	12	16	20	24	28	32	36	40
5	5	10	15	20	25	30	35	40	45	50
6	6	12	18	24	30	36	42	48	54	60
7	7	14	21	26	35	42	49	56	63	70
8	8	16	24	32	40	48	56	64	72	80
9	9	18	27	36	45	54	63	72	89	90
10	10	20	30	40	50	60	70	80	90	100

x	1	2	3	4	5	6	7	8	9	10
1	1	2	3	4	5	6	7	8	9	10
2	2	4	6	8	10	12	14	16	18	20
3	3	6	9	12	15	18	21	24	27	30
4	4	8	12	16	20	24	28	32	36	40
5	5	10	15	20	25	30	35	40	45	50
6	6	12	18	24	30	36	42	48	54	60
7	7	14	21	26	35	42	49	56	63	70
8	8	16	24	32	40	48	56	64	72	80
9	9	18	27	36	45	54	63	72	89	90
10	10	20	30	40	50	60	70	80	90	100

x	1	2	3	4	5	6	7	8	9	10
1	1	2	3	4	5	6	7	8	9	10
2	2	4	6	8	10	12	14	16	18	20
3	3	6	9	12	15	18	21	24	27	30
4	4	8	12	16	20	24	28	32	36	40
5	5	10	15	20	25	30	35	40	45	50

x	1	2	3	4	5	6	7	8	9	10
1	1	2	3	4	5	6	7	8	9	10
2	2	4	6	8	10	12	14	16	18	20
3	3	6	9	12	15	18	21	24	27	30
4	4	8	12	16	20	24	28	32	36	40
5	5	10	15	20	25	30	35	40	45	50

x	1	2	3	4	5	6	7	8	9	10
1	1	2	3	4	5	6	7	8	9	10
2	2	4	6	8	10	12	14	16	18	20
3	3	6	9	12	15	18	21	24	27	30
4	4	8	12	16	20	24	28	32	36	40
5	5	10	15	20	25	30	35	40	45	50



Les compléments à 10

$1+9=10$	●	●	●	●	●	●	●	●	●	●	$9+1=10$
$2+8=10$	●	●	●	●	●	●	●	●	●	●	$8+2=10$
$3+7=10$	●	●	●	●	●	●	●	●	●	●	$7+3=10$
$4+6=10$	●	●	●	●	●	●	●	●	●	●	$6+4=10$
$5+5=10$	●	●	●	●	●	●	●	●	●	●	$5+5=10$

